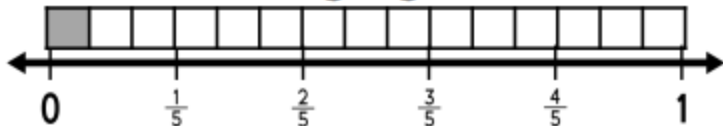


Shade to model the equation.

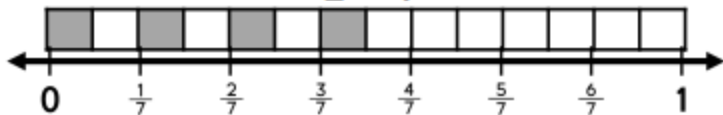
$$\frac{1}{3} \times \frac{1}{5}$$



$$\frac{1}{3} \times \frac{2}{4}$$



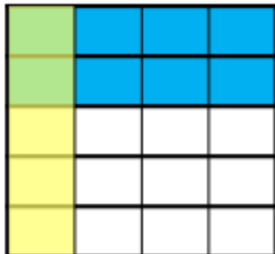
$$\frac{1}{2} \times \frac{4}{7}$$



Shade, draw, and solve. First fraction is in yellow, second fraction is in blue. Overlap is in green for the answer.

1.

$$\frac{1}{4} \times \frac{2}{5}$$




2.

$$\frac{1}{3} \times \frac{1}{2}$$



3.

$$\frac{1}{2} \times \frac{3}{4}$$



4.

$$\frac{2}{4} \times \frac{1}{3}$$

